

LESSON
2-9

Subtraction by Counting Up



Use the **counting-up method** to solve these problems. Use the number lines if they are helpful.


Example:

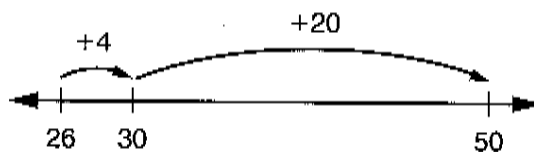
$$50 - 26 = ?$$

$$\text{Think: } 26 + 4 = 30$$


$$30 + 20 = 50$$

$$4 + 20 = 24$$

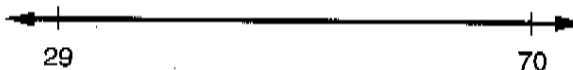
$$\text{So, } 50 - 26 = 24$$



1. $80 - 37 = \underline{\hspace{2cm}}$



2. $70 - 29 = \underline{\hspace{2cm}}$



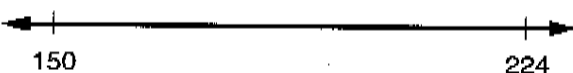
3. $\underline{\hspace{2cm}} = 130 - 84$



4. $120 - 45 = \underline{\hspace{2cm}}$



5. $224 - 150 = \underline{\hspace{2cm}}$



6. $\underline{\hspace{2cm}} = 146 - 92$

