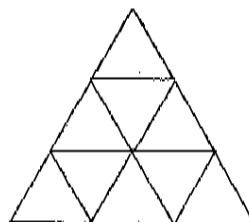
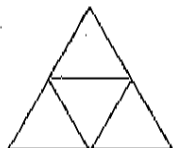




7. How many triangular blocks does it take to make the next figure in the pattern?



- (A) 7
- (B) 9
- (C) 16
- (D) 18

8. What is the next number in the pattern below?

32 40 48 56 64 ?

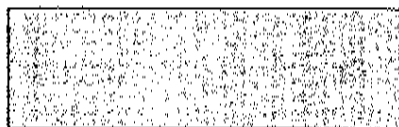
- (A) 70
- (B) 72
- (C) 76
- (D) 78

9. What is the next number in the pattern below?

1 2 4 7 11 ?

- (A) 20
- (B) 16
- (C) 14
- (D) 12

10. How many lines of symmetry does a rectangle have?



- (A) 4
- (B) 3
- (C) 2
- (D) 1

©2002 Op& Publishing, Inc. No part of this document may be reproduced without the written permission of the publisher.

ADDITIONAL INSTRUCTION AND PRACTICE

E10

4.4A