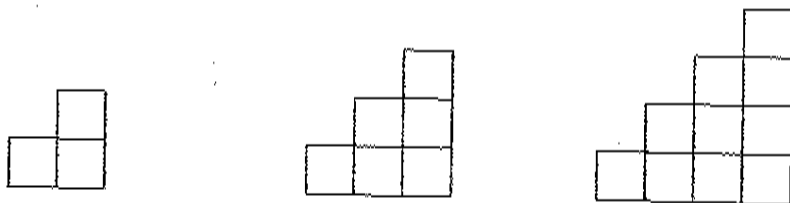


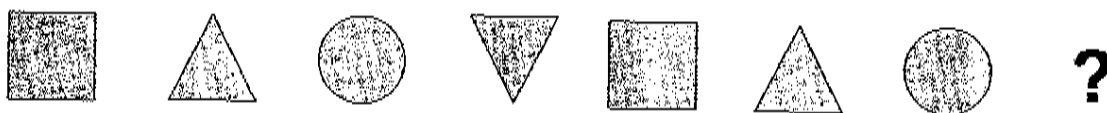


4. How many blocks will it take to make the next figure in this pattern?



- (A) 11 (B) 13 (C) 15 (D) 18

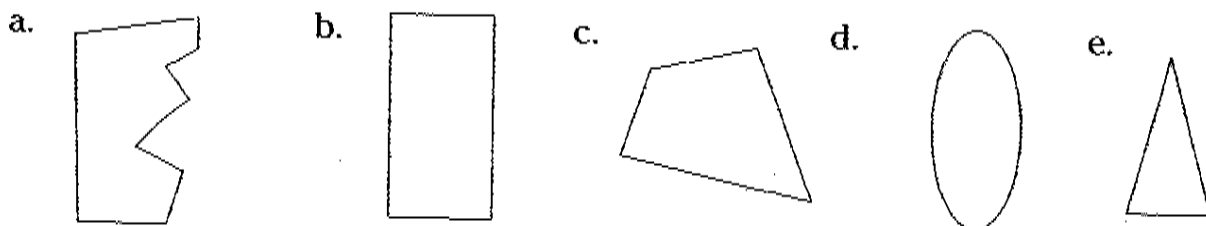
5. Look at the pattern below.



If the pattern continues, what will the next shape be?

- (A)  (B)  (C)  (D) 

6. Which of the following shapes have more than 1 line of symmetry?



- (A) b and d
 (B) b, d, and e
 (C) b, c, and d
 (D) b, c, and e

F9

4.4A