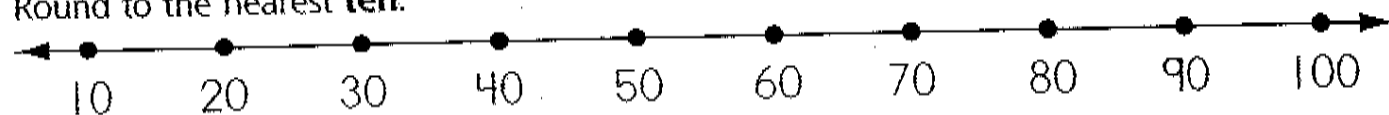


Rounding Numbers

Name _____

Use the number lines to help you round these numbers.

Round to the nearest **ten**.



39 _____

52 _____

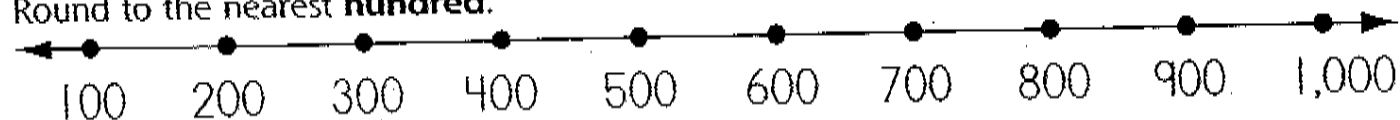
53 _____

64 _____

87 _____

26 _____

Round to the nearest **hundred**.



199 _____

540 _____

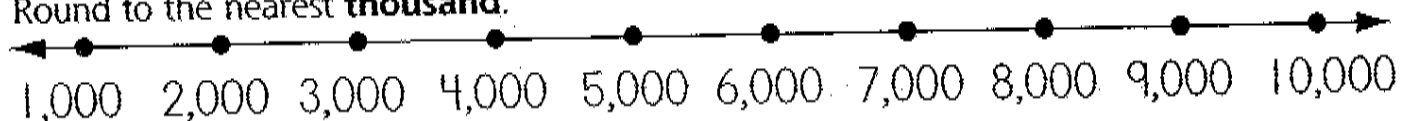
225 _____

306 _____

863 _____

685 _____

Round to the nearest **thousand**.



8,127 _____


6,800 _____

5,572 _____

2,916 _____

1,439 _____

4,789 _____



Round off numbers to 10,000 to the nearest ten, hundred, and thousand