


PRE-TEST—Measurement

Complete.

4, 4 B a



1. 4 feet = \_\_\_\_\_ inches

4 feet 6 inches = \_\_\_\_\_ inches

2. 24 feet = \_\_\_\_\_ yards

2 yards 2 feet = \_\_\_\_\_ feet

3. 5 yards = \_\_\_\_\_ feet

1 yard 10 inches = \_\_\_\_\_ inches

4. 1 mile = 5,280 feet

8 feet 4 inches = \_\_\_\_\_ inches

*(add all sides)*

Find the perimeter of each figure. 4, 3, C

a

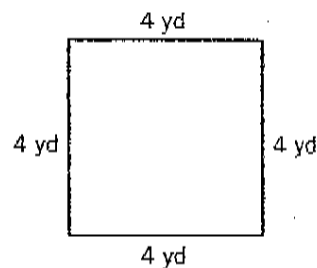
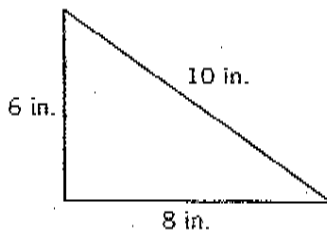
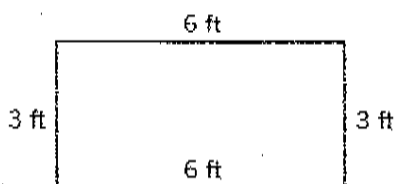
b

c

5. \_\_\_\_\_ feet

\_\_\_\_\_ inches

\_\_\_\_\_ yards



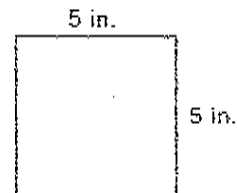
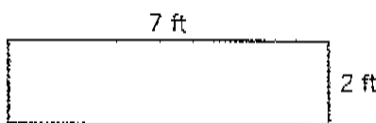

*(base x height)*

Find the area of each rectangle.

6. \_\_\_\_\_ square yards

\_\_\_\_\_ square feet

\_\_\_\_\_ square inches



J1