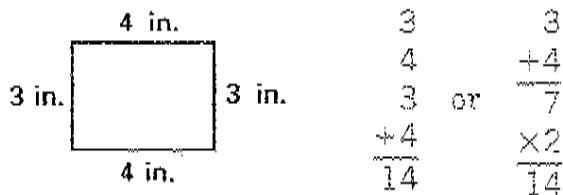
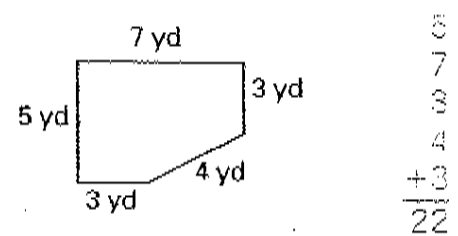


Lesson 2 Perimeter



perimeter: 14 in.



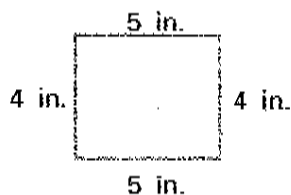
perimeter: _____ yd

Find the perimeter of each figure.

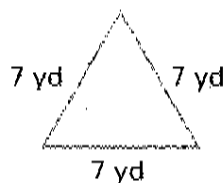
a

b

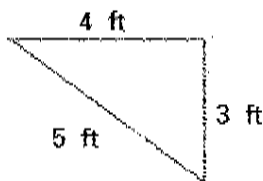
1. _____ inches



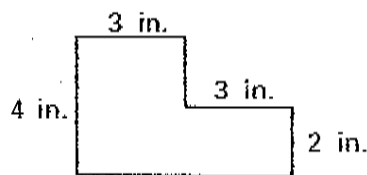
_____ yards



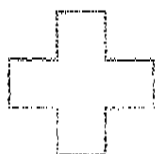
2. _____ feet



_____ inches

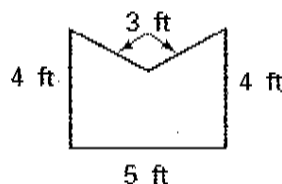


3. _____ inches

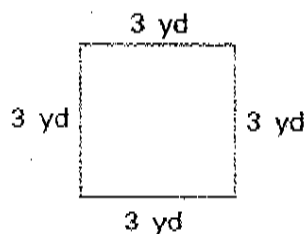


Each side is 1 inch long.

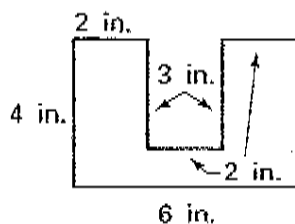
_____ feet



4. _____ yards



_____ inches



J15