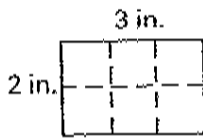
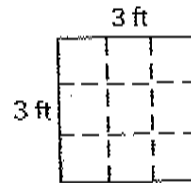


Lesson 3 Area



$$\begin{array}{r} 3 \\ \times 2 \\ \hline 6 \end{array}$$

area: 6 square inches

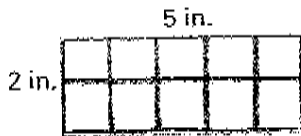


$$\begin{array}{r} 3 \\ \times 3 \\ \hline 9 \end{array}$$

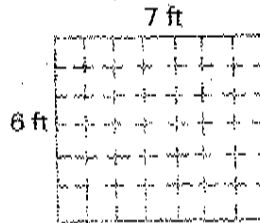
area: _____ square feet

Find the area of each rectangle.

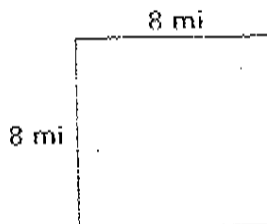
1. _____ square inches



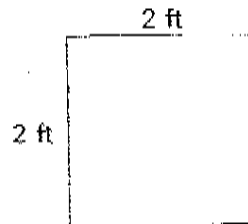
_____ square feet



2. _____ square miles



_____ square feet



	length	width	area
3.	8 ft	5 ft	_____ square feet
4.	12 in.	8 in.	_____ square inches
5.	142 ft	57 ft	_____ square feet
6.	36 yd	12 yd	_____ square yards
7.	18 in.	15 in.	_____ square inches