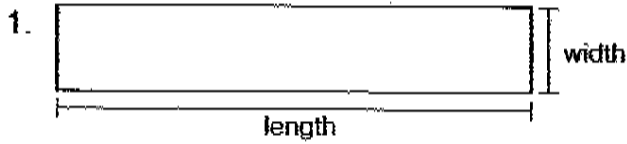


NAME _____

DATE _____

BREAK THROUGH!


Use a ruler to measure the length and width of each board to the nearest half inch. Then find the perimeter. Remember that the perimeter is the distance around an object.




length = _____ in.
 width = _____ in.
 perimeter = _____ in.




length = _____ in.
 width = _____ in.
 perimeter = _____ in.



length = _____ in.
 width = _____ in.
 perimeter = _____ in.



length = _____ in.
 width = _____ in.
 perimeter = _____ in.



length = _____ in.
 width = _____ in.
 perimeter = _____ in.



length = _____ in.
 width = _____ in.
 perimeter = _____ in.

J210