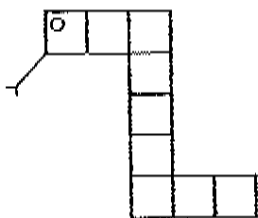


# Perimeter and Area Zoo

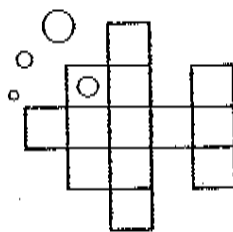
A shape doesn't have to be a square or a rectangle to have perimeter and area. The animals in this zoo are different shapes. Can you find each animal's perimeter and area?

**Remember:** To find perimeter, count the sides of the units. To find area, count the number of whole units.



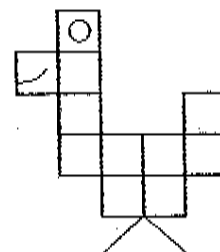
1. Perimeter \_\_\_\_\_

Area \_\_\_\_\_



2. Perimeter \_\_\_\_\_

Area \_\_\_\_\_



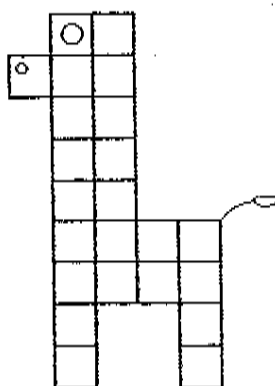
3. Perimeter \_\_\_\_\_

Area \_\_\_\_\_



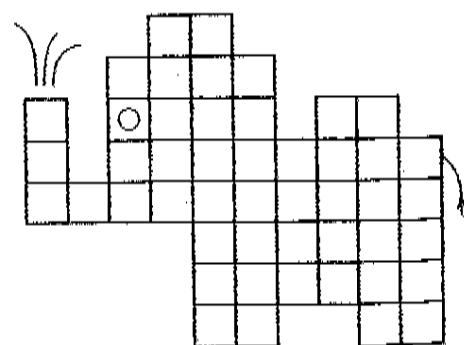
4. Perimeter \_\_\_\_\_

Area \_\_\_\_\_



5. Perimeter \_\_\_\_\_

Area \_\_\_\_\_



6. Perimeter \_\_\_\_\_

Area \_\_\_\_\_

4.3.B

J31