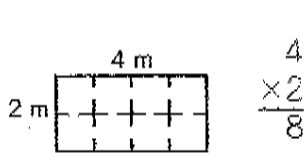
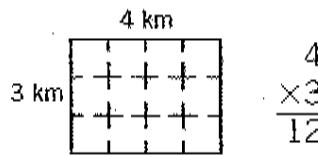


Lesson 5 Area

To find the area of a rectangle, multiply the measure of its length by the measure of its width.



area: 8 square meters



area: _____ square kilometers

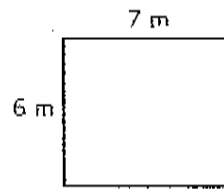
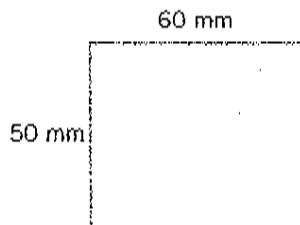
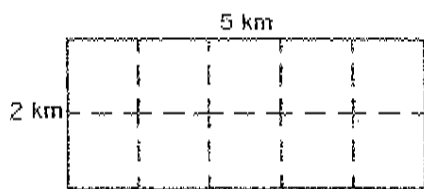
Find the area of each rectangle.

a

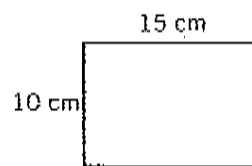
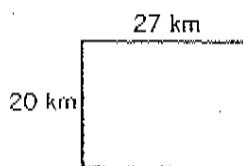
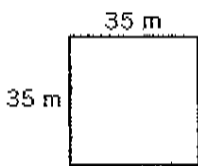
b

c

1. _____ square kilometers _____ square millimeters _____ square meters



2. _____ square meters _____ square kilometers _____ square centimeters



	<i>length</i>	<i>width</i>	<i>area</i>
3.	9 km	6 km	_____ square kilometers
4.	18 cm	7 cm	_____ square centimeters
5.	14 m	10 m	_____ square meters
6.	175 mm	25 mm	_____ square millimeters
7.	152 cm	100 cm	_____ square centimeters